















NAME \_\_\_\_\_ DATE \_\_\_\_\_

# FRUIT ADDITION

Count and write the total number of fruits altogether in each group.

1	 + 	$\begin{array}{r} 1 \\ + 2 \\ \hline \end{array}$
2	 + 	$\begin{array}{r} 5 \\ + 2 \\ \hline \end{array}$
3	 + 	$\begin{array}{r} 1 \\ + 4 \\ \hline \end{array}$
4	 + 	$\begin{array}{r} 5 \\ + 1 \\ \hline \end{array}$
5	 + 	$\begin{array}{r} 2 \\ + 2 \\ \hline \end{array}$
6	 + 	$\begin{array}{r} 2 \\ + 3 \\ \hline \end{array}$